

Year 4 Homework Summer Term 2 – Week 5

Name:

Main Activity

Investigate

Stage 1: complete using digits 0-9 (use each digit no more than once)

$$\square\square\square + \square\square = \square\square\square$$

Stage 2: complete using digits 0-9 (use each digit no more than once) and with the digit 9 in this position:

$$\square\square 9 + \square\square = \square\square\square$$

Explain

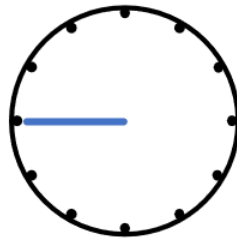
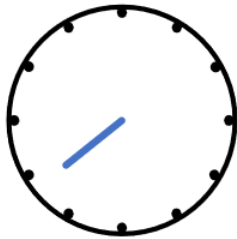
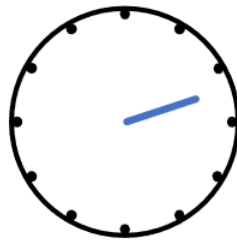
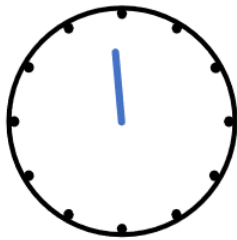
Order these lengths from shortest to longest:

750mm 160cm 0.9m your height

Estimate

There is a hand missing from each clock.

For each clock, what time could it be?



How many ways?

$$\begin{array}{r} \square\square\square \\ \times 5 \\ \hline \square 125 \end{array}$$

Fill in the missing digits.

Level 1: I can find a way

Level 2: I can find different ways

Level 3: I know how many ways there are

Numeracy

1 $67 + \square = 111$

2 $94 + \square = 153$

3 $\square + 78 = 145$

4 $\square + 45 = 131$

5 $105 - \square = 39$

6 $113 - \square = 54$

7 $\square - 73 = 78$

8 $\square - 64 = 66$

9 $55 + \square = 102$

10 $89 + \square = 124$

11 $\square + 76 = 133$

12 $\square + 64 = 161$

Your Comments

.....

.....

.....

.....

.....

.....

.....

.....

Parent Comments

.....

.....

Handwriting - linked to spelling pattern

Copy each spelling at least three times

famous

nervous

ridiculous

carnivorous

herbivorous

porous

adventurous

courageous

outrageous

advantageous

Write three sentences using your spellings

Clue Here